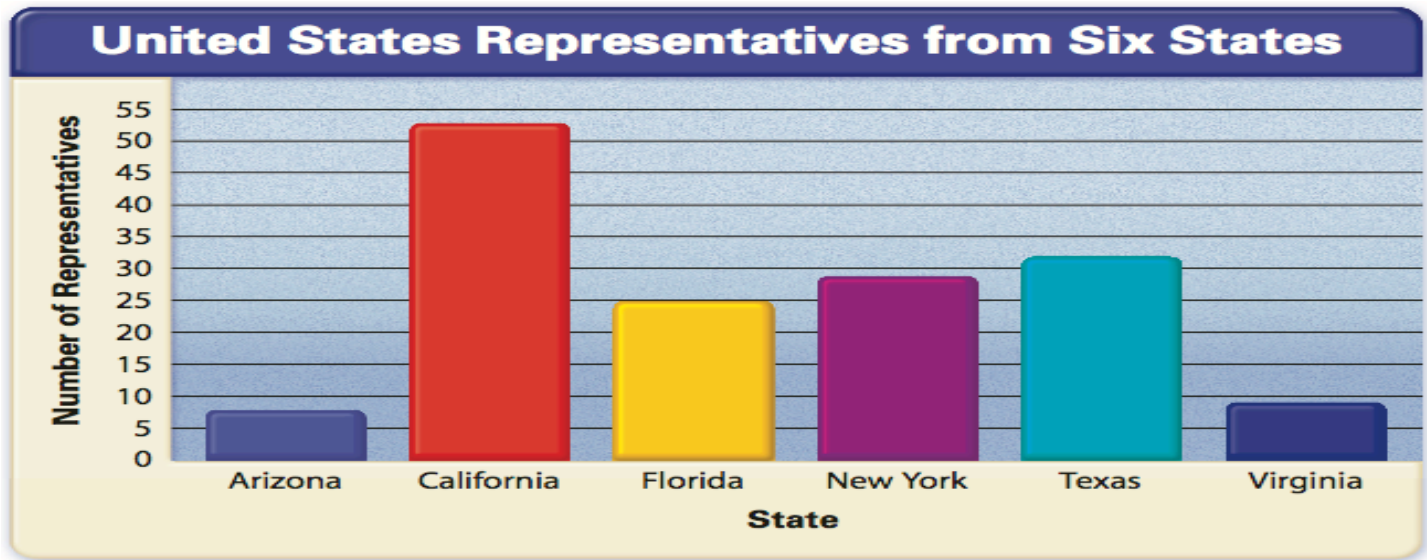


Read from your Social Studies Book (Graph Skills)

- Pages 274,275 and answer the questions

Class Work



1. Which of these states has the most representatives?

2. Which has the fewest?

3. Does California have more than 55 representatives or fewer than 55 representatives?

4. Which state has a larger population, California or Texas? How can you tell?

5. Which states have more than 20 representatives?

6. What would the bar graph look like if a state had 70 representatives?

***** Homework: Workbook p. 64 email by Thursday, April 16th**

Social Studies Wednesday, April 15, 2020

Chapter 7 Lesson 4

Read from your Social Studies Book
Pages 276-278 and answer the questions

1. There are _____ kinds of local government, _____
governments and _____ or town governments.

2. In what two years were state constitutions written for California?

3. Why did California have two constitutions, in 1849 and 1879?

4. Why did it take 30 years to approve the California Constitution of 1879?

5. A _____ is a group of people that makes laws.

6. How does the council-manager form of government work?

7. In the _____-manager form of government, voters _____
a city council.

Social Studies Thursday, April 16, 2020

Chapter 7 Lesson 4

Read from your Social Studies Book
Pages 279 and answer the questions

1. In the _____-council form of government, voters in a city elect the _____ and the council members.

2. The city of Los _____ has a _____-council form of government.

3. What kinds of laws might a city need?

4. How does the mayor-council form of government work?

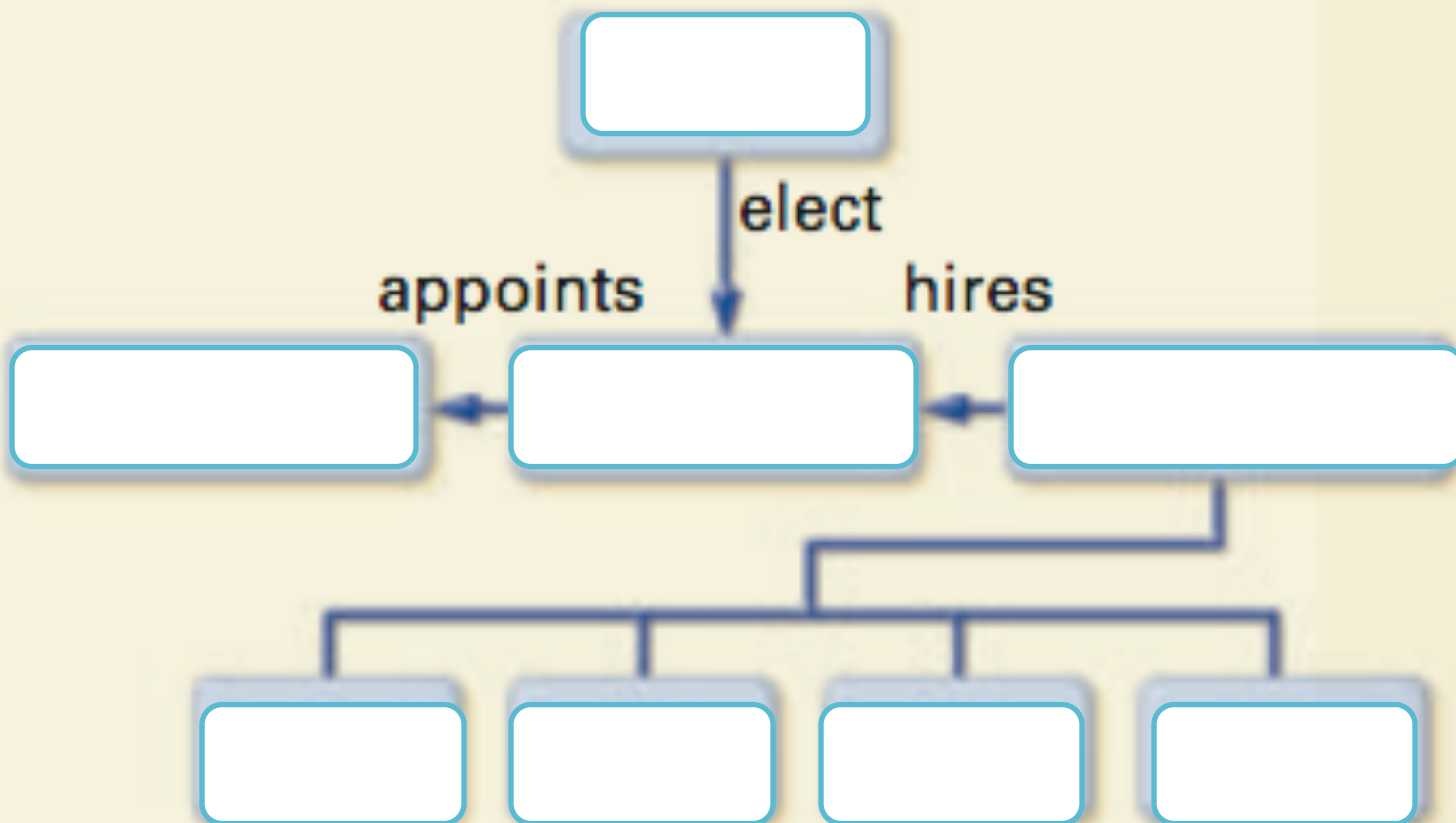
5. How are the two forms of government different?

6. In California the mayor-council form is found in large cities such as,

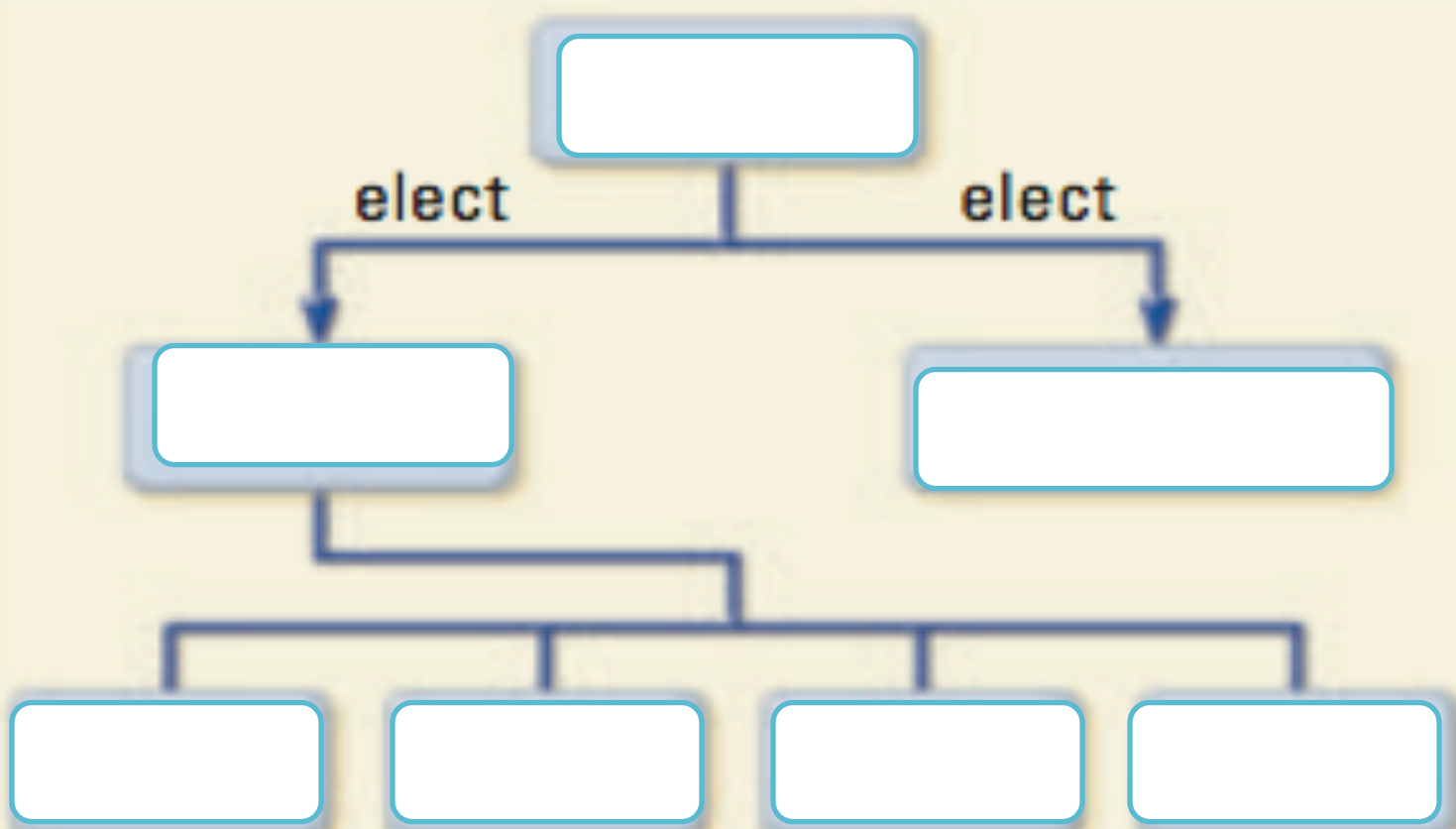
_____, _____,

_____, and Los Angeles.

COUNCIL-MANAGER



MAYOR-COUNCIL



Social Studies Friday, April 17, 2020
Chapter 7 Lesson 4

Use this page to paste the tree